

MOTHER KEVIN MEMORIAL PRIMARY SCHOOL NSAMBYA
PRIMARY SEVEN REVISION SET VII
ENGLISH

Time allowed: 2 hours 15 minutes

Name: _____ Stream _____

SECTION A

Fill in with a suitable word

1. As _____ as judge arrived, court sessions began.
2. The pilgrims walked to Namugongo _____ foot for a week.
3. If I talked to dad, he _____ give the money.
4. While I was going to school, I met a _____ of dogs.
5. Neither Ibo _____ Ibe comes from Uganda.

In numbers 6-15, use the correct form of words given in brackets.

6. The pupil is _____ the deposit from now. (fill)
7. Mutooro put on a _____ helmet. (heavily)
8. The thief _____ from the cells. (escape)
9. A few _____ were found in the food store. (mouse)
10. Although it rained _____, we continued walking.
11. She fetched water _____ a day. (two)
12. Their father is a _____. (Germany)
13. Mr. Lwasa's Luganda is _____ than Mr. Musa's. (good)
14. Namanda lost _____ pen yesterday. (she)
15. Kakooza and _____ friends are going to the internet café. (he)

In questions 16-17, rearrange the given words in dictionary order.

16. English, Ateso, Luganda, French

-
17. save, safe, same, snake

In questions 18-20 give the plural forms of the underlined words.

18. I have just lost my key.

19. He was walking on a very muddy road.

20. Kato's mother-in-law is very kind.

For numbers 21-23, write the opposites of the following.

21. He is standing at the entry.

22. The lake is very rough this morning.

23. Thomas bought a sharp knife.

In questions 24- 25, use the given words to construct meaningful sentences.

24. see_____

25. sea_____

Rewrite giving a single word for the underlined words.

26. My father is talking to a man who repairs cars.

27. The son of a king usually banks the money on Friday.

Questions 28-29, rearrange the given words to make correct sentences.

28. The hold a party year every bankers.

29. Shawn Will the book bring?

Write in full

30. shan't _____

Sub-section II

Rewrite as instructed in brackets.

31. The bus left most of the passengers. They didn't book the tickets early. (Use.....because.....)

32. The cashier gave Joan some money. She presented her withdraw form. (Use.....as soon as.....)

33. The internet café was far. I could not reach it. (Use.....too.....to.....)

34. We are going to visit the zoo tomorrow. (Use.....might.....)

35. Okurutu likes cartoons. Akello likes cartoons. (Begin: Both.....)

36. This is the lady. She came to our school. (Use....who.....)

37. If he does not load airtime, he will call you. (Begin: Unless.....)

38. Kityo likes eating more than working. (Use.....prefer.....to.....)

39. Day scholars usually reach school late. (Use.....arrive.....)

40. That is a good shirt. (Begin: Those are.....)

41. Fatuma and Sarah are equally smart. (Use.....as.....as.....)

42. She bought a new car. She wanted to ease the transport. (Use.....inorder to.....)

43. Mr. Musoke is a teacher. He is also a driver. (Use as well as.....)

44. The girl is very tall. She can touch the ceiling. (Use....so....that.....)

45. That is the officer. His gun got lost. (Use...whose.....)

46. If I get money, I will go to town. (Use.....would.....)

47. Mutebi is not sick. Lusozi is not sick. (Begin: Neither.....nor.....)

48. She stammers. She holds the attention of the audience. (Begin: Although.....)

49. Nobody helps me to repair this vehicle. (End.....myself)

50. I visited the bank. I wanted to deposit some money. Use.....so as.....)

SECTION B

51. **Read the passage below and answer in full sentences the questions that follow.**

Every Monday, we receive Etop and Bukedde newspapers from the media agents. The newspapers carry both **exciting** headlines and shocking ones. Our teachers encourage us to read these newspapers. By reading these newspapers, we get to know what is happening in the country. We also learn new words and improve on our grammar in local languages. We complete Junior cross word puzzles too.

My friends and I have different interests in the newspaper. My friend, Moen, **likes** completing cross word puzzles. My other friend, John, likes reading pullouts because

they have many stories written by children. I love sports, so each time I get a newspaper, I start with the back page where sports news is written.

During the assembly, the teacher on duty picks some pupils to read out some articles to the whole school. Some articles tell very sad stories. Others tell exciting stories like the one the head prefect read us last week. It was about the pupil who was burnt to death while saving her friends from being killed by a fire.

Questions

a) When does the writer's school get newspapers?

b) Which newspapers are given to the writer's school?

c) What is Moen interested in?

d) What was the article about?

e) What does John like?

f) Who read the article according to the passage?

g) Why should pupils read newspapers?

h) Give another word to mean :

- i) exciting _____
ii) likes _____

i) Give the plural form of news

52. **Read the notice blow and answer the questions in full sentences.**

PEACE AND SECURITY WORK-SHOP

ALL SECURITY COMPANIES IN WAKISO ARE HEREBY INVITED FOR A TWO DAY WORKSHOP

THEME: Peace and security in our communities

Venue: Abaita Ababiri

Date: 20th -21st October

Time: 9:00am to 4:00pm daily

Entry fee: 50,000/= per company

Number of participants: 5 people per company. Break tea and lunch will be provided to the participants.

All security companies must attend without fail.

Announced by Capt. Katongole Andrew

Questions

a) What is the notice about?

b) What is the theme of the workshop?

c) Where is the workshop going to take place?

d) Who must attend without fail?

e) When will the workshop take place?

f) How many days will the workshop take?

g) How much will each company pay?

h) Who wrote this police noticed?

i) Write Capt. In full.

j) Give another word to mean venue.

53. **Rearrange the given sentences to form a correct story.**

- a) We left home for a long journey.
- b) Before we reached the airport, we felt hungry.
- c) We had lunch at Sunny Restaurant
- d) Unfortunately, the cashier didn't give us a receipt.
- e) At the end, we warned the cashier to always keep records.
- f) Fortunately one customer had seen us pay the money to the cashier.
- g) This made her claim that we had not given her the money.
- h) We were going to Entebbe Airport.
- i) After having lunch, we paid the bills.
- j) We decided to go for lunch

a) _____

b) _____

c) _____

d) _____

e) _____

f) _____

g) _____

h) _____

i) _____

j) _____

54. **Read the poem and answer in full sentences.**

THE TRAVELLERS

*Welcome on board
The conductor politely says
Luggage into the racks
Passengers on to your seat*

*Remember to fasten your seatbelt
A life savior it is!
A ticket I give you
For the fare you paid*

*Departure time knocks
Our driver is never late
Through hills and valleys
His coach speeds past*

*Stage after stage
Passengers a light
At their last destination
To rest and last
Namubiru Jesca*

Questions

a) What is the poem about?

b) Who welcomes passengers on board?

c) How does he welcome them?

d) Where should the luggage be put?

e) Why should the passengers wear a seat- belt?

f) What does the conductor give to the passengers?

g) Where does the coach pass?

h) How many stanzas does the poem have?

55. Fill in the blank spaces with the words given in the box below.

army	statement	property	defend	wrists
guns	handcuffs	security	enforce	Police cell

The _____ and the police work hand in hand to promote peace and _____. However, their roles differ in some areas for instance the main work of the police is to _____ law and order, while that of the army is to protect and _____ its citizens and their _____ from the enemies.

Both the army and police officers carry weapons such as _____ and pistols which they use when need arises. For the case of the police officers they move with _____ when they arrest any wrong door, they put them around his /her _____. They do this to prevent the wrong door from running away.

After arresting him, he is taken to the police stations to make a _____. He is then put in a _____ where he is produced in court for trial.

*******GOD BLESS*******

MOTHER KEVIN MEMORIAL PRIMARY SCHOOL NSAMBYA
PRIMARY SEVEN REVISION SET VII
MATHEMATICS

Time allowed: 2 hours 30 minutes

Name: _____ Stream _____

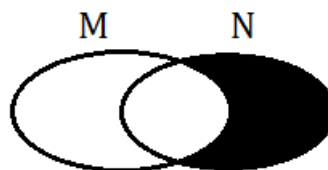
SECTION A

1. Subtract: $29 - 14$

2. Write XIX as a Hindu Arabic numeral.

3. Given that $P = \{p, q, r, s, t, u\}$, find $n(K)$

4. Name the unshaded region.



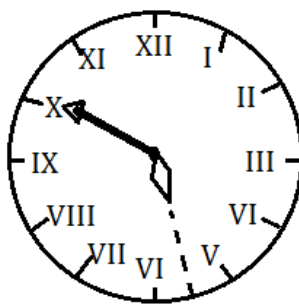
5. Work out the LCM of 6 and 8.

6. Simplify: $2b + 3y + 4b + 6y$



7. Write 3067 in words.

8. Write the time in figures.






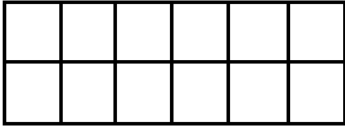

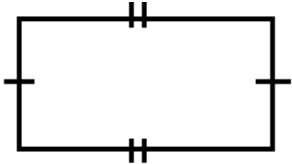


9. Express $4\frac{1}{3}$ as an improper fraction.

10. Add: $\frac{1}{2} + \frac{2}{3}$

11. Arrange the integers below in ascending order +3, -11, 0, +5, -13

12. Write $4000 + 600 + 90 + 3$ in short form.

<p>13. Given the following heights 65cm, 74cm, 99cm, 36cm, find the range.</p>	<p>14. Given that  represents 4 balls, how many balls are represented by     ?</p>
<p>15. Find the next number in the progression 2, 5, 9, 14, _____</p>	<p>16. Shade $\frac{1}{6}$ of the figure below.</p> <div data-bbox="842 617 1185 741" data-label="Figure">  </div> <div data-bbox="1419 512 1539 611" data-label="Image">  </div>
<p>17. How many lines of symmetry have the figure below?</p> <div data-bbox="188 1129 477 1291" data-label="Image">  </div>	<p>18. Mukasa is driving a car at 80km/hr. What distance does he cover after 3 hours?</p>
<p>19. Work out by adding the bases $322_{\text{five}} + 11_{\text{five}}$</p>	<p>20. Bam had a piece of cloth 14.6 metres. He sold 0.3 metres. What piece of cloth remained?</p>

SECTION B

21. Given the numeral 6,342

a) Write the numeral in words.

(2mks)

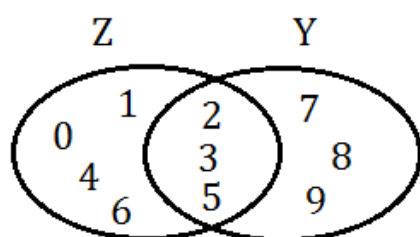
b) What is the place value of 3 in the numeral above?

(1mk)



c) Find the sum of the values of 6 and 4 in the numeral above.
(2mks)

22. Study the Venn diagram and answer the questions.



(a) List the members of set Y.

2mk

b) Find;

i) $n(Z \cup Y)$

2mks

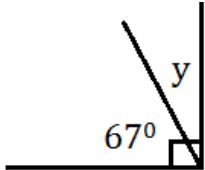
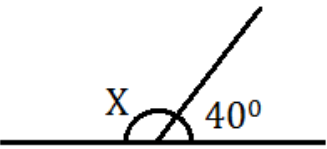
ii) $n(Z - Y)$

2mks

23. Given that $a = 3$, $b = 4$ and $c = 5$, find the value of:

i) $a + b + c$

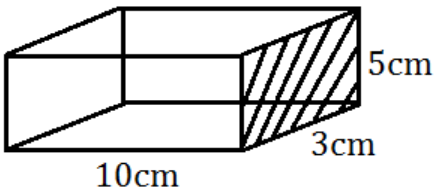
(2mk)

<p>ii) $\frac{bc}{c}$ (2mks)</p>	<p>iii) $bc - ab$ (2mks)</p> <div data-bbox="1409 590 1528 688" style="border: 1px solid black; width: 73px; height: 47px; margin-left: auto;"></div>										
<p>24(a) Add: 2mks</p> <table style="margin-left: 40px;"> <thead> <tr> <th style="text-align: right;">Hours</th> <th style="text-align: right;">minutes</th> </tr> </thead> <tbody> <tr> <td style="text-align: right;">3</td> <td style="text-align: right;">4 0</td> </tr> <tr> <td style="text-align: right;">+ 4</td> <td style="text-align: right;">1 5</td> </tr> <tr> <td colspan="2"><hr style="border-top: 1px solid black;"/></td> </tr> <tr> <td colspan="2"><hr style="border-top: 1px solid black;"/></td> </tr> </tbody> </table>	Hours	minutes	3	4 0	+ 4	1 5	<hr style="border-top: 1px solid black;"/>		<hr style="border-top: 1px solid black;"/>		<p>b) A driver covered a distance of 120km in 2 hours. Calculate his speed. 2mks</p>
Hours	minutes										
3	4 0										
+ 4	1 5										
<hr style="border-top: 1px solid black;"/>											
<hr style="border-top: 1px solid black;"/>											
<p>25. Find the missing angles marked by letters.</p>											
<p>a) (2mks)</p> 	<p>b) (2mks)</p> 										
<p>26. Musitwa was given cards numbered 6, 2, 8 to form numerals.</p>											
<p>a) Write the largest numeral formed. 1mk</p>	<p>b) Write the smallest numeral formed. 1mk</p>										

<p>27(a) Nakibuule bought a pair of shoes at sh.28000 and sold it at sh.25500. Calculate the loss that she made. (2mks)</p>	
<p>b) If Musa bought 4 cakes for sh.2400, how much did he pay for one cake? (2mks)</p>	<p>c) Find the cost of $\frac{1}{2}$kg of rice at sh.1600. (2mks)</p>
<p>28. Mugarula is 12 years old. Anthony is 3 years older than Mugarura. a) How old is Anthony? 2mks</p>	
<p>b) Find their total age. 2mks</p>	<p>c) How old will Mugarura be in 3 years' time? 2mks</p>

--	--

29. The figure below is a cuboid. Use it to answer the questions.



(a) How many faces does the shape have? 1mk

b) Work out the area of the shaded part. 2mks

c) Find the volume of the shape. 2mks



30(a) Work out:

a) (2mks)

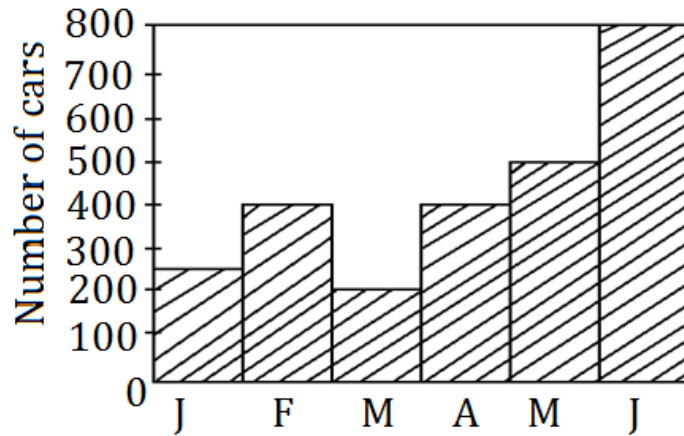
$$\begin{array}{r}
 324_{\text{five}} \\
 + 240_{\text{five}} \\
 \hline
 \\
 \hline
 \end{array}$$

b) (2r)

$$\begin{array}{r}
 433_{\text{five}} \\
 - 202_{\text{five}} \\
 \hline
 \\
 \hline
 \end{array}$$

c) Write 234_{five} in words. (2mks)

31. The graph below shows the number of cars sold in Nakawa in the first half of the year.



a) In which two months were the car sales recorded the same?

1mk

b) In which month was the car sales recorded 500 cars?

2mk

c) Find the total number of cars sold in the six months.

3mks



MOTHER KEVIN MEMORIAL PRIMARY SCHOOL NSAMBYA
PRIMARY SEVEN REVISION SET VII

SCIENCE

Time allowed: 2 hours 15 minutes

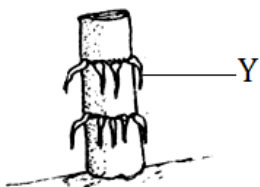
Name: _____ Stream _____

SECTION A

1. Mention the process by which plants make their own food.

2. Why is a book regarded as matter?

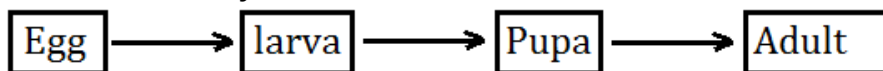
3. Give the use of the roots shown by letter Y.



4. What is epigeal germination?

5. What is the work of a drone bee in a hive?

6. Name the life cycle shown below.




7. Why do farmers prefer free range system of keeping poultry in rural areas?

8. How is the ribcage an important part of the skeleton to man?

9. Write down one local method of preserving food.

10. How are fungi dangerous to man?

11. Give one way of maintaining oral hygiene?

-
12. Where does the digestion of food end in man?
-
13. Which type of change in the environment which takes place in living things?
-
14. Give one importance of skin in humans.
-
15. How does painting metals prevent rusting?
-
16. Identify any one piece of equipment needed by a bee farmer when he is going to harvest honey.
-
17. Below is a method of grazing goats. Give one advantage of this method.
- 
-
18. In which part of the digestive system does the absorption take place?
-
19. In the space given below, draw a trowel.
-
20. Convert 68°F to °C.
-
21. What is dehydration?
-
-

22. Which crop growing practice helps to reduce the number of seedlings in the garden or nursery bed?

23. Which type of soil is used to make glass?

24. How are kidneys important in our bodies?

25. Name the type of soil with the highest water drainage capacity.

26. What is BCG in full?

27. What do we call an adult male sheep?

28. Why do some objects float on water?

29. In the space given below, draw a diagram to show that air has weight.

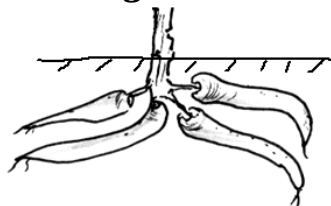
30. Name one process involved in rain formation apart from transpiration.

31. Write down one way drought affects farmers in Uganda.

32. Mention one example of stem tuber.

33. What is the importance of sunlight during photosynthesis?

The diagram below shows cassava roots. Use it to answer questions 34.



34. How is cassava propagated?

35. How can a person prevent the spread of malaria in a school?

36. Why are some flowers of some plants brightly coloured?

37. Write one way of controlling root crop pests.

38. Point out one reason why bees swam.

39. Why is it a good practice to dust chickens in a poultry house?

40. How can a mother care for her dehydrated child? Give one way.

SECTION B

41. (a) What are poultry vices?

(b) Mention one example of a poultry vice.

(c) Identify any one cause of poultry vices.

(d) Why is litter such as coffee husks put in a poultry house?

42. Match the following correctly.

List A	List B
Heart	Lack of iron in blood
Lungs	Body building + repair
Anaemia	Pumps blood in the body
Proteins	Breathing organs in humans

(i) Heart

- (ii) Lungs _____
(iii) Anaemia _____
(iv) Proteins _____

43. (a) Name the part of a mushroom that produces spores.

(b) Mention the food value we get from eating mushrooms.

(c) Apart from a mushroom, write down two examples of fungi.

(i) _____

(ii) _____

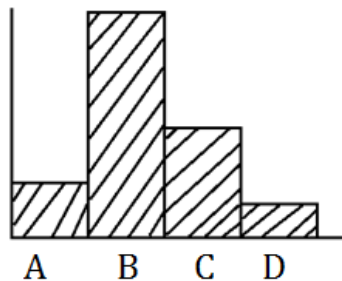
44. (a) What is first aid?

(b) Identify any one reason for giving first aid.

(c) Mention any one quality of a good first aider.

(d) What is a first aid kit?

45. ***The diagram below shows the different parts of air. Use it to answer the questions that follow.***



(a) Name the gases represented by letters

(i) B _____

(ii) D _____

(b) In which instrument is gas D used in order to prevent fire?

(c) Which part of air above supports germination of seeds?

46. (a) What is pollination?

(b) Outline any one agents of pollination.

(i) _____

(ii) _____

(c) What is the importance of a stigma on a flower during pollination?

47. (a) What are biological changes?

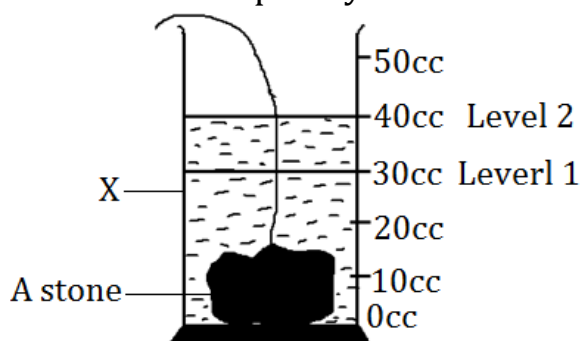
(b) Give any two examples of biological changes.

(i) _____

(ii) _____

(c) Why is reproduction in animals regarded as a biological change?

48. A stone was completely immersed in water as shown below.




(a) What method is used to find the volume of the stone?

(b) Name the container labeled X.

(c) Find the volume of the stone.

(d) If the mass of the stone is 50g, calculate its density.

49. **Study the diagram below and answer questions that follow.**



(a) What chemical change will take place on the nails if left in the container above?

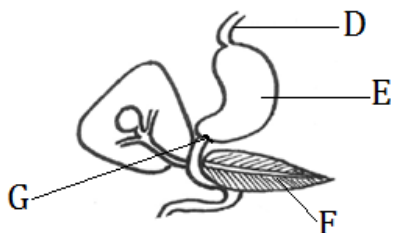
(b) Identify the conditions that allow rusting to take place.

- (i) _____
- (ii) _____
- (c) How can rusting of garden tools such as hoes be prevented?
- _____

50. **Study and complete the table given below.**

Crop	Method of propagation
Pineapple	i)
Carrots	ii)
iii)	Planting stem cuttings
iv)	Planting bulbs

51. **Study the diagram below and answer questions about it.**



(a) Name the parts of the diagram marked D and F.

(i) D _____

(ii) F _____

(b) Which class of food is first digested at E?

(c) By what process does food pass through the gullet?

52. (a) Write down any one cause of soil erosion.

(b) Mention one way of controlling soil erosion in the school compound.

(c) What is soil erosion?

(d) Name one agent of soil erosion.

53. (a) Give any one sign of measles.

(b) Why is measles vaccine given at the age of nine months?

(c) Besides measles, mention one other childhood immunizable disease.

(d) What is a vaccine?

54. (a) What do you understand by the term “matter?”

(b) State any one state of matter.

(c) Mention the process by which heat travels through solids.

(d) What do we call the change of a solid to a liquid?

55. (a) Which is the main natural source of heat energy?

(b) State any one form of energy apart from heat.

(c) Give any one example of fuels.

(d) What is temperature?

********GOD BLESS********

MOTHER KEVIN MEMORIAL PRIMARY SCHOOL NSAMBYA
PRIMARY SEVEN REVISION SET VII
SOCIAL STUDIES

Time allowed: 2 hours 15 minutes

Name: _____ **Stream** _____

SECTION A

1. Which line of latitude is marked 0° ?

2. How is a school helpful to the community around it?

3. Name the forces shown in the diagram below.



4. How are the matrons helpful in the primary boarding schools?

5. Give one reason why the National flag should be raised (flown) at half-mast.

6. Why didn't Kabaka Daudi Chwa sign the 1900 Buganda Agreement?

7. Which local council member is directly responsible for the children's affairs?

8. Which type of wood is obtained from natural forests?

9. What is poaching?

10. What name is given to the money used in Uganda?

11. What is the main work of police?

12. Name the port that Sir Samuel Baker built in Acholi.

13. Name the symbol of Uganda as an independent Nation.

14. What is an extended family?

15. Which missionary brought the first cotton seed to Uganda?

16. What is formal Education?

17. Mention any one achievement of Alexander Mackay in Uganda.

18. Why should a good map have a key?

19. State one problem faced by the people who live in mountainous areas.

20. Who were the first foreigners to come to Uganda?

21. Why should trees be planted in the school compound?

22. Which title is given to the political head of a district?

23. Stated one way how the National Anthem is respected by the Ugandans.

24. Why are legends taught to school going children?

25. Name any one large inland port on Lake Victoria.

26. Name the largest National game park in Uganda.

27. Which term is given to the high point on the mountain?

28. Why was the crested crane chosen to be the National Emblem?

29. Give one way how a radio is important in your community.

30. Who was the last king of the Batembuzi?

31. Name the explorer who fought against slave trade in Acholi area.

-
32. Name any one climatic region (zone) in Uganda.
-
33. Give any one cause of child abuse in Uganda.
-
34. Why is Karimajong move with their cattle from one place to another?
-
35. Who designed the Uganda coat of Arms?
-

For questions 36 to 40 answer either the Christianity Or Islamic but not both in the same number.

36. **Either:** Who was the first woman to be created?
-
- Or:** Who was the mother of Prophet Muhammad?
-
37. **Either:** Which day marks the end of the Lent period?
-
- Or:** What is saum?
-
38. **Either:** Which son of Abraham did God instruct to be sacrificed?
-
- Or:** Write PBUH in full.
-
39. **Either:** Where will God fearing people go after the final Day of Judgment?
-
- Or:** Where will Allah fearing people go after the final day of judgment?
-
40. **Either:** Name the prophet who was thrown in a den.
-
- Or:** Which prophet in Islam received the Injir?
-

SECTION B

41. a) Who signed the 1900 Buganda Agreement on behalf of the Buganda government?
-
- b) Write down any two terms of the 1900 Buganda Agreement.
- i) _____
- ii) _____
- c) Give one result of the 1900 Buganda Agreement.
-

42. a) What does the word “Ntu” mean in the Bantu languages?

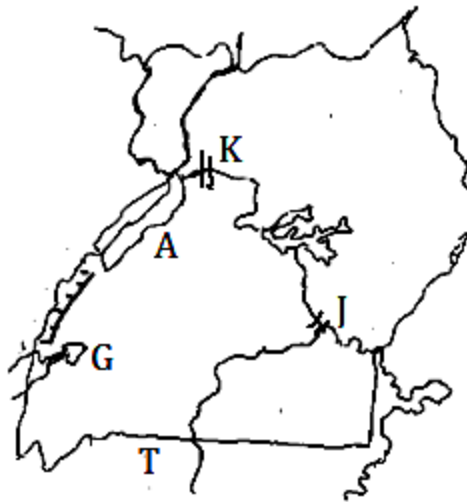
b) Name the cradle land for the Bantu.

c) Mention any two tribes which are under the Bantu Ethnic group in Uganda.

i) _____

ii) _____

43. Study the map below and answer the questions that follow correctly.



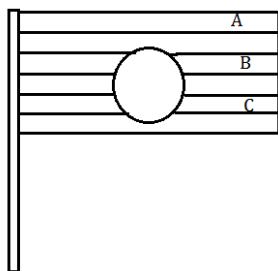
i) Name the country marked I.

ii) Name the part of River Nile from T to point K.

iii) How was the lake marked A formed?

iv) Name the lake marked G.

44. Use the Uganda National Flag below to answer the questions that follows.



i) Name the colours on the National flag marked:

A _____

B _____

C _____

ii) Give one situation when the Uganda flag should be raised at half-mast.

45. a) Who was the first king of the Bachwezi?

b) Name any two contributions of the Bachwezi in Uganda.

i) _____

ii) _____

c) What was the headquarters of the Bachwezi?

46. a) Which explorer named Lake Victoria?

b) State the local name for each of the following physical features.

i) Lake Victoria: _____

ii) Mountain Elgon: _____

c) Give one major importance of Lake Victoria to the people of Uganda.

47. Newspapers are among the mass media communication in Uganda.

a) Mention any two English newspapers in Uganda.

i) _____

ii) _____

b) Give two reasons why newspapers are not widely spread in rural areas of Uganda.

i) _____

ii) _____

48. a) What name was given to the early Indian trade in Uganda?

b) When the early Indians come to Uganda, they grew crops on plantations.

Name any two plantation crops they grew.

i) _____

ii) _____

c) Which money currency was introduced by the Indians in Uganda?

49. a) How many members make up the Local Council?

b) Why should every area be with a local council Committee?

c) Name any two local council committee members.

i) _____

ii) _____

50. Give the title given to each of the following kings.

- i)Busoga king: _____
ii)Bunyoro King: _____
b) State any two ways the kings are useful to the people in their Kingdoms.
i) _____
ii) _____

For questions 51 to 55, answer Either Christianity Or Islamic but not both in the same number.

51. **Either:** Match the following correctly

List A

List B

- | | |
|------------|--|
| Canaan | - The place where Moses received the Ten Commandments. |
| Abram | - It is the Promised Land |
| Mt. Sinai | - The place where Noah's ark rested after the floods. |
| Mt. Ararat | - Abraham's first name |

- i)Canaan: _____
ii)Abram: _____
iii)Mt. Sinai _____
Mt. Ararat: _____

Or: How are the following people important in the Islamic faith.

- i) Muazzin _____
ii) Imam _____
b) Name the prophet who founded Islam.

c) Who was the first prophet in Islam?

52. **Either:** a) Who killed Abel?

b) Name the person who baptized Jesus Christ.

c) Name the Apostle who denied Jesus three times?

d) Who is the grandfather of all believers?

Or: Write down any four pillars of Islam.

- i) _____
ii) _____
iii) _____
iv) _____

53. **Either:** a) Who is your neighbour according to Christianity?

b) State two ways how you can help a friend.

i) _____

ii) _____

c) What lesson do you learn from the parable of a Good Samaritan?

Or: Write down any four prayers said by a good Muslim in a day.

i) _____

ii) _____

iii) _____

iv) _____

54. **Either:** a) Why did Jesus teach in parables.

b) Write any two parables in the Holy Bible.

i) _____

ii) _____

c) Name the parable in the Bible which teaches about being helpful.

Or: Name any four prophets in the Islamic faith.

i) _____

ii) _____

iii) _____

iv) _____

55. **Either:** a) Name the two parts of the Holy Bible.

i) _____

ii) _____

b) Write down any two Gospel books.

i) _____

ii) _____

Or: a) What do we call the period when Muslims fast?

b) Give three importance of fasting for the Muslims.

i) _____

ii) _____

iii) _____

*****GOD BLESS*****